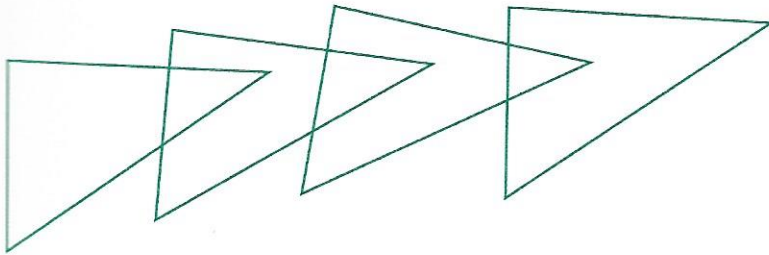



1 a. Combien **vois-tu** de triangles ? \_\_\_\_\_



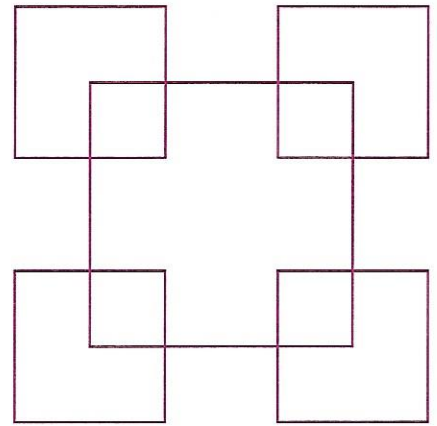
• Je vois \_\_\_\_\_ triangles.

b. Combien **vois-tu** de pentagones ? \_\_\_\_\_



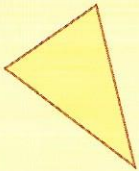
• Je vois \_\_\_\_\_ pentagones.

c. Combien **vois-tu** de carrés ? \_\_\_\_\_




• Je vois \_\_\_\_\_ carrés.


## Quelques polygones



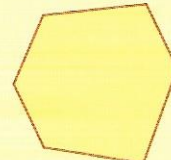
triangle  
(3 côtés)



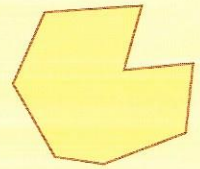
quadrilatère  
(4 côtés)



pentagone  
(5 côtés)



hexagone  
(6 côtés)




octogone  
(8 côtés)

2

a. Trace un segment pour partager le rectangle en 2 quadrilatères.



b. Trace un segment pour partager le rectangle en 1 quadrilatère et 1 triangle.



c. Trace un segment pour partager le rectangle en 1 triangle et 1 pentagone.

